

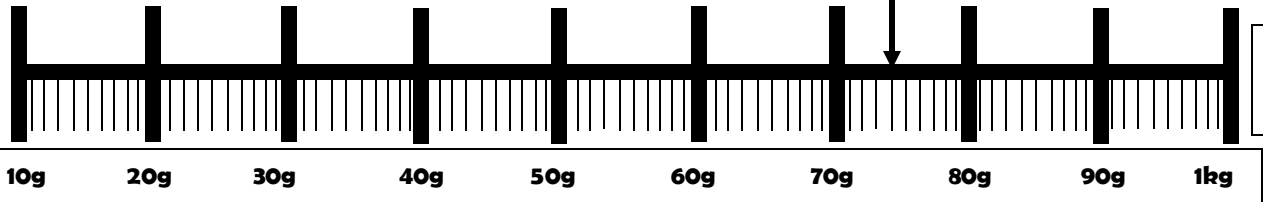
Name:

Date

mass

1) Sarah Weighs 24kg. Dave weighs 3kg more. How much does he weigh?

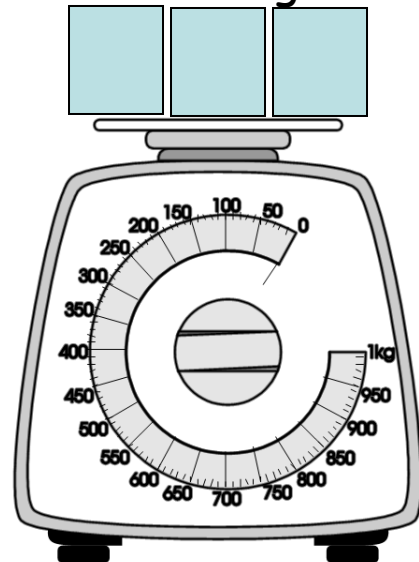
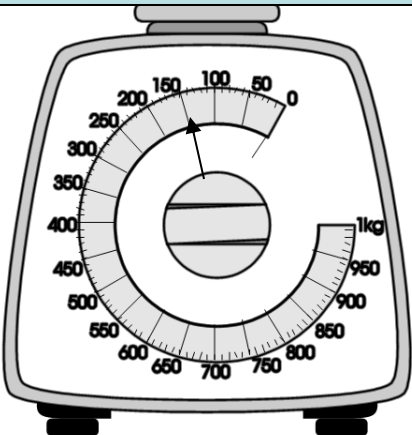
2) How grams is my scale showing?



3a) If a Plum weighs 50g, how much will 5 plums weigh?

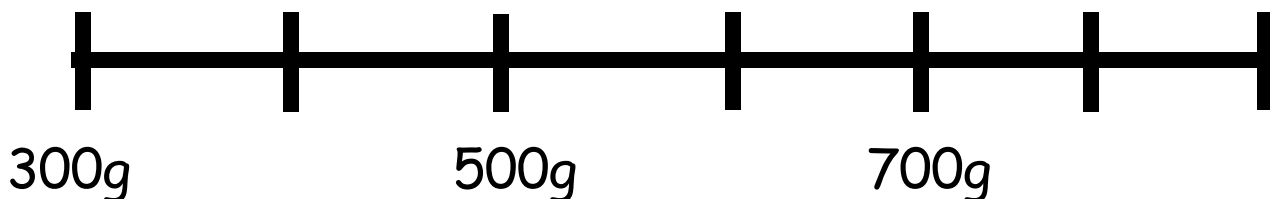
3b) How many plums will weigh 700g?

4) Look at the scales. How much will 3 boxes weigh? Show this on the scales



5) Peter weighs 36kg. Sarah weighs 12 less than Peter. How much does she weigh?

6) A plant pot weighs 200g. Complete the scale and show how much 4 plant pots weigh?



7) 1000g can also be written as?

8) There are 4 kg of apples in a bag. How many Kilograms are in 6 bags?

9) An elephant weighs 200kg more than a lion. A lion weighs 153kg. How much does an elephant weigh?

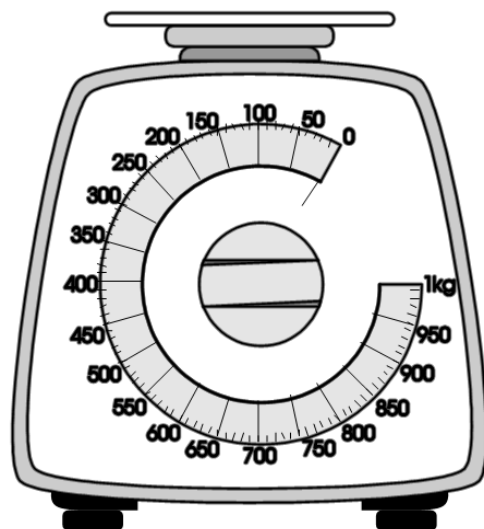
10) $\frac{1}{2}$ kg is the same as _____g.

11) Show 730g on the scales.

12) Sam weighs 16kg

Alice weighs 22kg

What is their total weight?

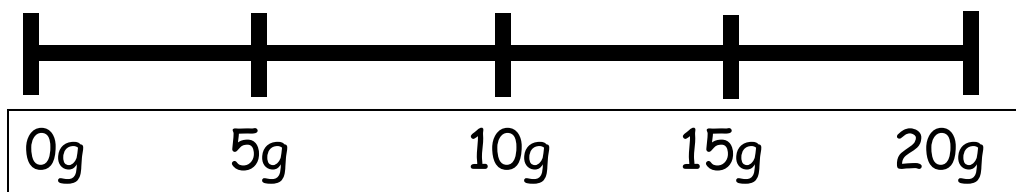


Name:

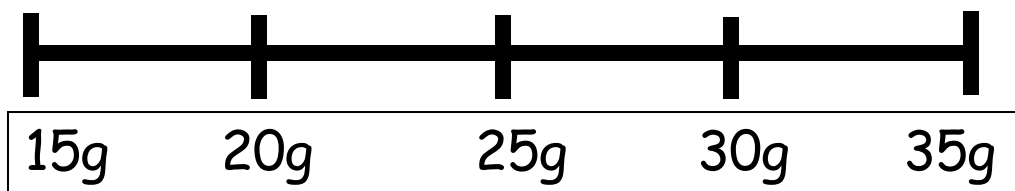
Date:

mass

1) Add together 2g and 8g. Show the answer on the scale.



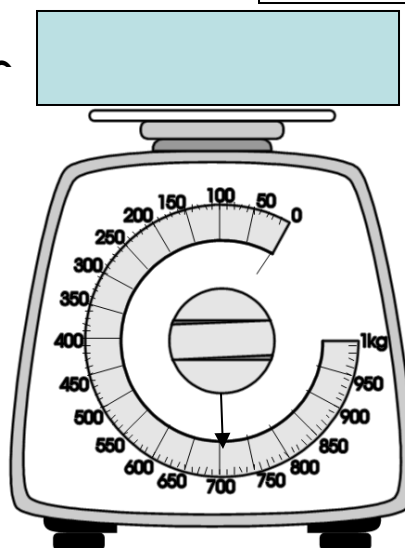
2) Add together 2g, 10g, and 3g. Show the answer on the scale



3) What is heavier, 200g or 2kg?

4) Lee weighs 10kg. Sarah weighs 2kg more. How much does she weigh?

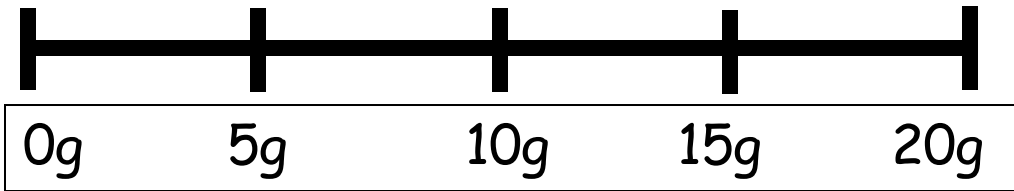
5) How much does the box weigh?



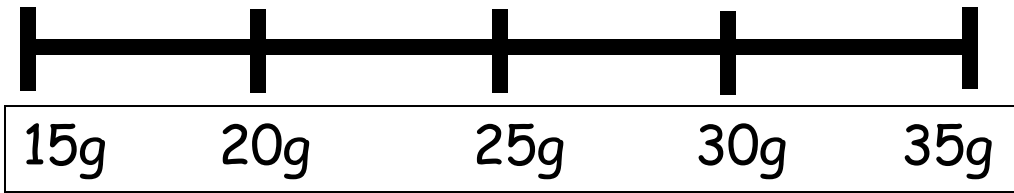
6) One apple weighs 30g. How much do 2 apples weigh?

7) 40g take away 10g is _____g?

8) Take away 20g from 35g. Show the answer on the scale



9) Add together 10g and 15g. Show the answer on the scale.



10) Look at the scales

Show 100g less on these scales.

