



Who Wants To Be
A Millionaire?

What's the
weight?
(mass)





Question 1

An apple

A 5 g (grams)

B 150 g (grams)

C 1.5 kg (kilograms)

D 15 kg (kilograms)

An apple

A 5 g (grams)

B 150 g (grams)

C 1.5 kg (kilograms)

D 15 kg (kilograms)



£100



Question 2

A thirty-centimetre
plastic ruler

A 20 grams

B 20 kilograms

C 2 g

D 2 kg

A thirty-centimetre
plastic ruler

A 20 grams

B 20 kilograms

C 2 g

D 2 kg



£200



Question 3

A bag of crisps

A 300 grams

B 3 kilograms

C 30 g

D 30 kg

A bag of crisps

A 300 grams

B 3 kilograms

C 30 g

D 30 kg



£300



Question 4

A mobile phone

A 10 grams

B 10 kilograms

C 100 g

D 1 kg

A mobile phone

A 10 grams

B 10 kilograms

C 100 g

D 1 kg



£500



Question 5

A bag of sugar

A 100 kilograms

B 1000 grams

C 100 g

D 10 kg

A bag of sugar

A 100 kilograms

B 1000 grams

C 100 g

D 10 kg



£1,000



Question 6

A paperclip

A 10 grams

B 1 kilogram

C 10 kg

D 1 g

A paperclip

A 10 grams

B 1 kilogram

C 10 kg

D 1 g



£2,000



Question 7

A large packet of
dried pasta

A 50 grams

B 50 kilograms

C 500 g

D 5 kg

A large packet of
dried pasta

A 50 grams

B 50 kilograms

C 500 g

D 5 kg



£4,000



Question 8

A newborn baby

A 30 grams

B 30 kilograms

C 3 kg

D 300 g

A newborn baby

A 30 grams

B 30 kilograms

C 3 kg

D 300 g



£8,000



Question 9

A Nintendo DS Lite

A 218 grams

B 2 kilograms

C 21 g

D 28 kg

A Nintendo DS Lite

A 218 grams

B 2 kilograms

C 21 g

D 28 kg



£16,000

Question 10

A tablespoon of sugar

A 28 kilograms

B 28 grams

C 280 g

D 2.8 kg

A tablespoon of sugar

A 28 kilograms

B 28 grams

C 280 g

D 2.8 kg



£32,000



Question 11

A fully-packed suitcase

A 20 kilograms

B 2 kilograms

C 20 grams

D 2 grams

A fully-packed suitcase

A 20 kilograms

B 2 kilograms

C 20 grams

D 2 grams



£64,000



Question 12

A bag of cement

A 50 grams

B 50 kilograms

C 5 kg

D 500 g

A bag of cement

A 50 grams

B 50 kilograms

C 5 kg

D 500 g



£125,000



Question 13

A small vacuum cleaner

A 6.5 kilograms

B 65 grams

C 65 kg

D 6.5 g

A small vacuum cleaner

A 6.5 kilograms

B 65 grams

C 65 kg

D 6.5 g



£250,000



Question 14

An adult male elephant

A 4,500 grams

B 4,500 kilograms

C 450 g

D 450 kg

An adult male elephant

A 4,500 grams

B 4,500 kilograms

C 450 g

D 450 kg



£500,000

Question 15

A double-decker bus

A 1,450 kilograms

B 1,450 grams

C 14,500 kg

D 14,500 g


A double-decker bus

A 1,450 kilograms

B 1,450 grams

C 14,500 kg

D 14,500 g



£1,000,000